


# Chapter A More on Numbers

## Worksheet 1 Positions from First to Twentieth

- 1 There are 10 children standing in a row.



(a) Daisy is 7th from the .

Frank is 6th from the .

(b)  is 3rd from the left.

is 8th from the right.

(c) Alex is  from the right.

Isha is  from the left.

(d) If Alex is 1st, then Elle is .

If Chin is 8th, then Harry is .

2 Match each position to its position word.

13th

twentieth

16th

ninth

10th

thirteenth

20th

fourteenth

14th

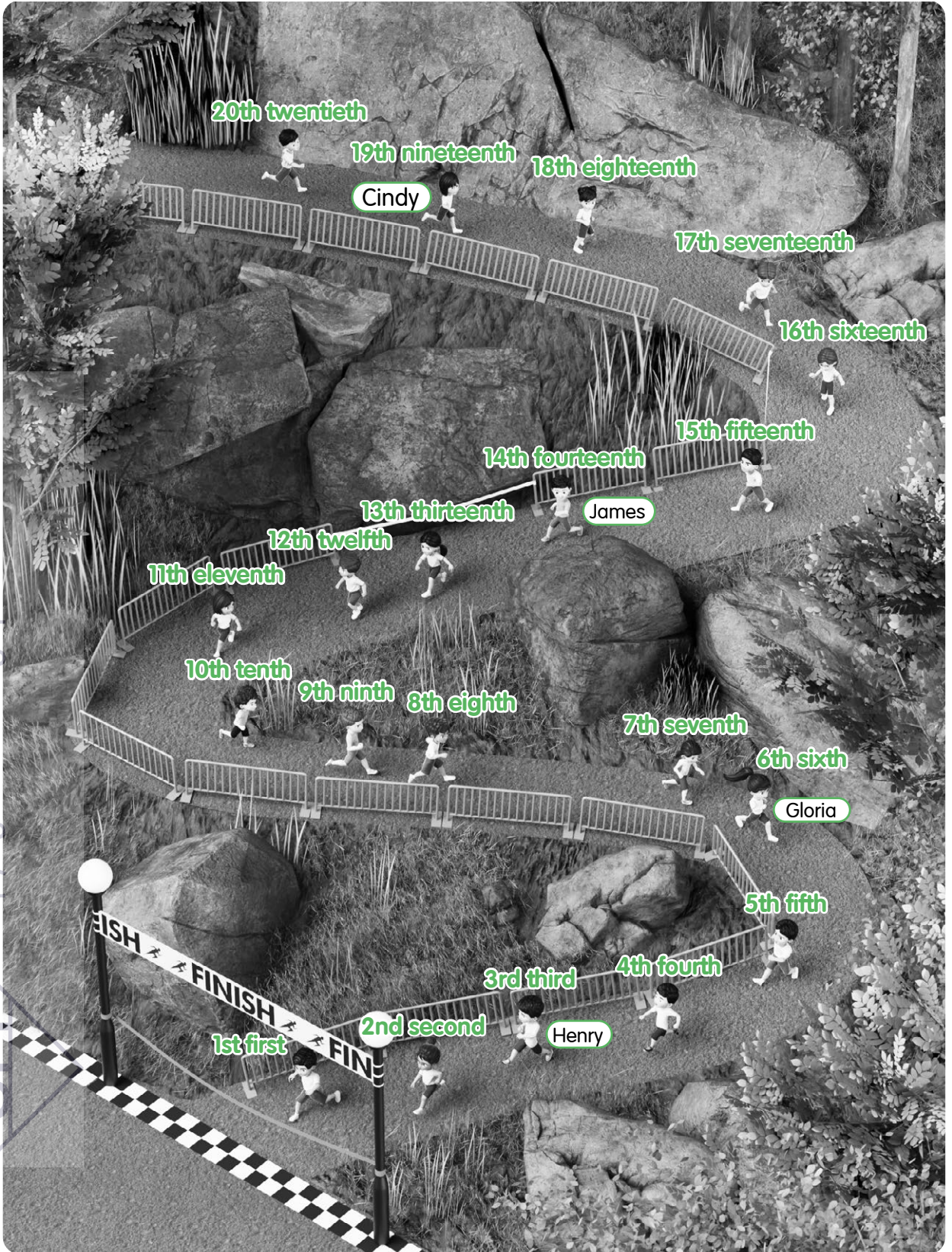
tenth

9th

sixteenth

Copyrights of Singapore Math Inc.

3 Fill in the boxes on the next page.



Copyrights of Singapore Math Inc.



(a) Gloria is .

(b)  is 3rd.

(c) James is .

(d)  is 19th.


4 There are 20 seats.



(a) Circle the 15th seat.

(b) Mark a cross (X) on the 18th seat.

5 Daisy is jogging in 11th place in a group run.



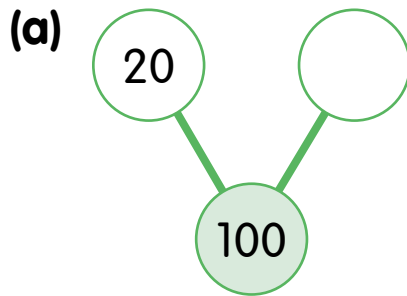
Ken is 6 positions behind Daisy.

Lucy is 3 positions in front of Daisy.

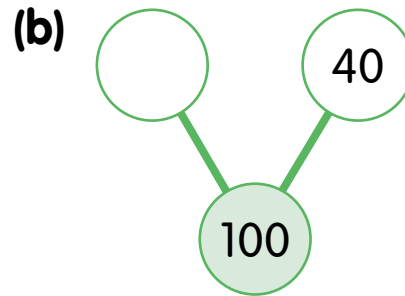
What are Ken and Lucy's positions?

Ken is in  position.

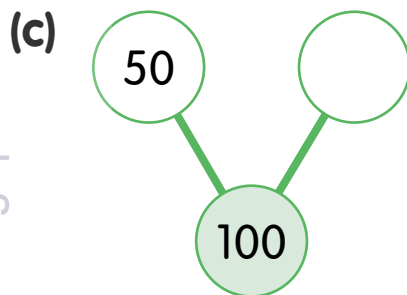
Lucy is in  position.

**Worksheet 2** Make 100 Involving Tens**1** Fill in the missing tens.

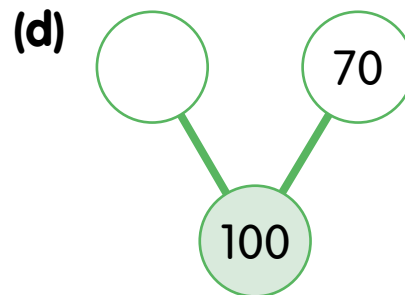
$$20 + \boxed{\phantom{00}} = 100$$



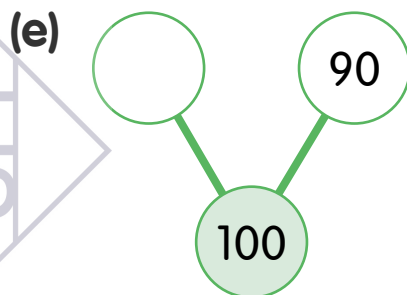
$$\boxed{\phantom{00}} + 40 = 100$$



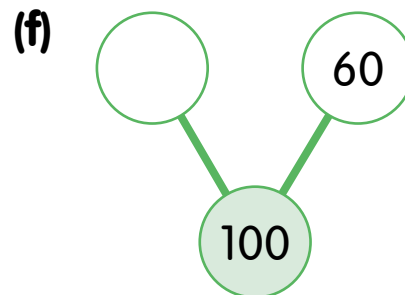
$$50 + \boxed{\phantom{00}} = 100$$



$$\boxed{\phantom{00}} + 70 = 100$$



$$100 - 90 = \boxed{\phantom{00}}$$



$$100 - \boxed{\phantom{00}} = 60$$

**2** Solve the word problems.

**(a)** Vani has 100 beads.

30 beads are yellow and the rest are orange.

How many orange beads does Vani have?

**(b)** A baker bakes 100 buns.

60 buns are coffee buns and the rest are butter buns.

How many butter buns does the baker bake?

**(c)** There are 100 apples and pears altogether in a box.

There are 80 apples in the box.

How many pears are there in the box?

SM