

Name: _____

Class: _____

Date: _____

Primary 1 Mathematics Bridging Worksheet 1A

Numbers to 10 – Comparing Numbers

1. Circle the set that has **more** objects.

(a)

Set A



Set B




(b)

Set C




Set D




Copyrights of Singapore Math Inc.

2. Circle the set that has **fewer** objects.


(a) Set W




Set X



(b) Set Y




Set Z







Copyrights of Singapore Math Inc.




3. Fill in the blanks with 'more' or 'fewer'.



(a) There are _____  than  .

(b) There are _____  than  .

4. Fill in the blanks with the correct answers.



(a) There is 1 more _____ than _____.

(b) There is 1 fewer _____ than _____.

5. Fill in each blank with the correct number.

(a) 1 more than 6 is _____.

(b) 1 more than 3 is _____.

(c) 1 less than 10 is _____.

(d) 1 less than 6 is _____.

(e) 3 is 1 more than _____.

(f) 8 is 1 less than _____.

6. (a) Circle the **greatest** number.

6 3 9 2

(b) Circle the **smallest** number.

8 0 5 4

Answer Key

- 1a. Circle Set A
- 1b. Circle Set D

- 2a. Circle Set W
- 2b. Circle Set Y

- 3a. more
- 3b. fewer

- 4a. drink than cupcake
- 4b. cupcake than drink

- 5a. 7
- 5b. 4
- 5c. 9
- 5d. 5
- 5e. 2
- 5f. 9

- 6a. Circle 9
- 6b. Circle 0

